

Name: _____

Week 18

Color in the boxes.

it = red, dig = purple,

why = pink, is = pink,

its = green

What is the hidden number? _____

its	dig	its	it	its	it
is	it	its	dig	is	dig
is	its	its	it	why	it
is	dig	it	dig	why	its
why	is	is	why	is	is
it	its	dig	its	why	dig
dig	its	it	dig	is	it
it	dig	dig	its	why	its

Circle the spelling words.

itsisitwhydigwhyisitdigitswhydigitsisisiswhyitdigiswhyit

isdigitsisitwhyitdigwhyitisitisdigdigwhywhywhyitsitsdig

digdigwhyitsitdigisdigitswhywhydigisitiswhyitdigdigisist

Name: _____

~~Weeks~~

d	i	g	h	t	g	i	d	i	w	h	y
h	n	v	g	i	t	s	g	t	s	h	s
x	w	i	w	i	i	b	w	s	o	i	s
t	t	w	i	h	g	h	i	t	i	e	s
y	d	s	g	t	o	s	i	w	i	e	i
s	i	h	w	i	t	k	h	w	i	m	t
x	s	o	i	u	o	s	l	i	t	i	g
w	j	h	s	v	w	w	k	s	s	y	h

it ↓
 is ↓

why →
 its →

dig →



begins with t sound

begins with j sound

jellyfish

tired

train



table

juggling



tank



jar

trophy



judge




turkey

touch

jeans




Gavin Takes Spider Home



edHelper.com

Gavin Takes Spider Home




Anna asks to hold Spider. Gavin takes a picture.

Gavin Takes Spider Home

Sight Words

take
has
all
and
the

for
he
to
into
where



Story Words

party
picture
Sunday
bouncy
backpack
Friday
jumping
asks
snap
takes

birthday
Monday
castle
Saturday
weekend
sees
spider
cake
school
day

Level: **Butterfly**

Word Count: **150**

Copyright © 2012 by edHelper

All rights reserved.



Gavin Takes Spider Home



It is time to eat cake. The cake looks like a bouncy castle.



It is Friday. Gavin will take Spider home for the weekend. Miss K gives Spider to Gavin.

2



Gavin wants a picture of Spider. Where is Spider? Gavin forgot Spider.

10




Gavin puts Spider into his backpack.

3




Oh. Anna still has Spider. Anna is eating cake. Spider is eating cake, too.

11



Gavin shows Spider to Robot. Robot holds Spider. Snap. Gavin takes a picture.



Gavin takes a picture. Anna gives Spider back.



It is Saturday. Kevin is having a birthday party. Gavin takes Spider to the party.

5




It is Sunday. Gavin has a lazy day. He sleeps with Spider all day.


13



Kevin is in the bouncy castle. Gavin runs to the bouncy castle.



It is Monday. Gavin takes Spider back to school.




Kevin and Gavin are jumping. Anna sees Gavin.

Telephone Skills

Activity 5: Finding Numbers in a Directory and on the Internet

DIRECTIONS: Use these listings from a business directory to answer the questions.

MUSEUMS — NURSES		 <p>Acheson School of Music <i>serving the community for 50 years</i> <i>students of all ages taught</i> <i>by professional musicians</i> <i>all instruments</i> 125 Main Street Acheson 555-111-9112 www.achesonplaysmusic.com</p>
MUSEUMS		
Acheson Gallery of Art 300 Main St.....	555-111-0431	
Children's Museum 10 Explorer's Way.....	555-111-9950	
Historical Society 450 Elm Ave.....	555-111-6792	
Museum of Space Science 15 Explorer's Way.....	555-111-9900	
MUSIC INSTRUCTION		
Acheson School of Music 125 Main St.....	555-111-9112 (See Our Ad on This Page)	
Fisher Isabella K Piano and Keyboard 65 Benton Park.....	555-111-5987	
Drumbeats 36 Bailey Rd.....	555-111-9966	
NAIL SALONS		
Allure Nail Salon & Spa 55 Park St.....	555-111-9845	
Miss Di's Beauty Palace 27 South Main St.....	555-111-8715	
NURSERIES — PLANTS, TREES		
Garden Delights 15 Bailey Rd.....	555-111-0365	
NURSES		
Care & Comfort 30 Park St.....	555-111-7790	

1. What is the phone number for the Museum of Space Science?

2. Miss Fisher is a piano teacher. What is her phone number?

3. What can you buy at Garden Delights?


4. What are the phone numbers of two nail salons?

5. Would you look before or after this page to find listings for motels?

Preparing Food

Activity 1: Identifying Items Found in a Kitchen

DIRECTIONS: Find these items in the picture. Write the number of the words in the circle next to the item.





1. Refrigerator
2. Freezer
3. Pot
4. Pan
5. Stovetop
6. Oven
7. Utensils
8. Measuring cups
9. Measuring spoons


Understanding the Value of Money


Activity 5: Counting Coins and Bills


DIRECTIONS: Circle the amount that matches the picture.

1.  A. \$.16 B. \$1.60 C. \$1.06



2.  A. \$.85 B. \$85 C. \$.58

3.  A. \$.14 B. \$1.40 C. \$.41

4.  A. \$1.25 B. \$10.25 C. \$102.50

5.  A. \$5.03 B. \$5.14 C. \$5.30

DIRECTIONS: Write the amount that matches all of the money below added together. Use the dollar symbol and decimal point (\$0.00).






6. _____


Going Grocery Shopping

Activity 7: Reading Unit Price Labels

DIRECTIONS: Read the unit price labels. Then answer the questions.

Unit Price 6¢ per oz.	
	Total Price \$1.08 18 oz.
Betty's Cereal	

Unit Price 9¢ per oz.	
	Total Price \$1.80 20 oz.
Jose's Cereal	

Unit Price 6¢ per oz.	
	Total Price \$1.44 24 oz.
Bob's Cereal	

1. Which product costs \$1.80?

2. Which product costs the most per ounce?

3. Which product has the most in the package?

4. Which products cost the same per ounce?

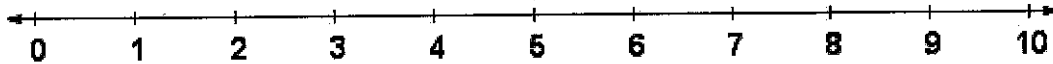
5. If you wanted the biggest box of cereal for the best price, which one would you buy?

Name _____



Date _____

Subtraction



Write the difference.

1. $\begin{array}{r} 3 \\ - 1 \\ \hline \end{array}$	2. $\begin{array}{r} 7 \\ - 2 \\ \hline \end{array}$	3. $\begin{array}{r} 10 \\ - 1 \\ \hline \end{array}$	4. $\begin{array}{r} 3 \\ - 2 \\ \hline \end{array}$	5. $\begin{array}{r} 9 \\ - 3 \\ \hline \end{array}$
6. $\begin{array}{r} 8 \\ - 3 \\ \hline \end{array}$	7. $\begin{array}{r} 5 \\ - 2 \\ \hline \end{array}$	8. $\begin{array}{r} 2 \\ - 1 \\ \hline \end{array}$	9. $\begin{array}{r} 6 \\ - 1 \\ \hline \end{array}$	10. $\begin{array}{r} 4 \\ - 2 \\ \hline \end{array}$

11. $3 - 1 = \underline{\quad}$	12. $10 - 3 = \underline{\quad}$	13. $9 - 2 = \underline{\quad}$
14. $8 - 1 = \underline{\quad}$	15. $5 - 1 = \underline{\quad}$	16. $4 - 3 = \underline{\quad}$
17. $2 - 2 = \underline{\quad}$	18. $7 - 3 = \underline{\quad}$	19. $2 - 1 = \underline{\quad}$

20. $\begin{array}{r} 10 \\ - 2 \\ \hline \end{array}$	21. $\begin{array}{r} 7 \\ - 3 \\ \hline \end{array}$	22. $\begin{array}{r} 8 \\ - 2 \\ \hline \end{array}$	23. $\begin{array}{r} 3 \\ - 3 \\ \hline \end{array}$	24. $\begin{array}{r} 4 \\ - 1 \\ \hline \end{array}$
25. $\begin{array}{r} 7 \\ - 1 \\ \hline \end{array}$	26. $\begin{array}{r} 10 \\ - 3 \\ \hline \end{array}$	27. $\begin{array}{r} 5 \\ - 3 \\ \hline \end{array}$	28. $\begin{array}{r} 9 \\ - 2 \\ \hline \end{array}$	29. $\begin{array}{r} 4 \\ - 1 \\ \hline \end{array}$

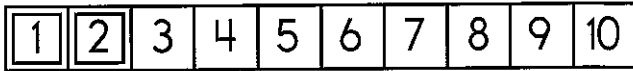
Name: _____



$5 + 4 = \underline{\quad}$

$5 + 4 = \underline{\quad}$

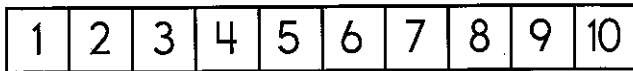
Draw ○



$2 + 6 = \underline{\quad}$

$2 + 6 = \underline{\quad}$

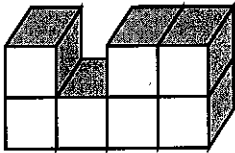
Draw □ and ○



$3 + 4 = \underline{\quad}$

$3 + 4 = \underline{\quad}$

How many blocks?



- cold
- culd
- cold
- coold

w l y w c f r
n f k m d h e
v w h e r e t
e r e e q f h

three

where

Read. When you read a number, write it.

7

Seven days from now is Halloween.

Eric has five cars.

Rose is two years old.

I played violin for five minutes.

Which is a doubles fact?

$7 + 1 = 8$

$9 + 9 = 18$

$3 + 2 = 5$

6 is more than

- 7 5 6

two

- 3 5 2


Write the missing sign.

$7 \underline{\quad} 4 = 11$



Name: _____


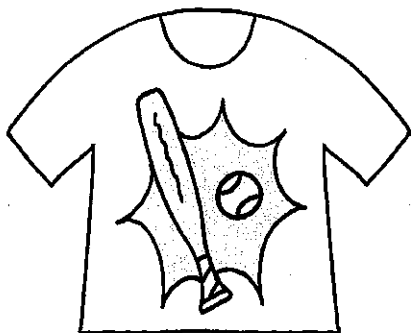
edHelper



_____ triangles _____ squares _____ stars
 _____ rectangles _____ circles _____ diamonds
 _____ ovals

How many circles and triangles are there altogether? _____

Draw and copy the shirt.



Circle the smaller number.

12

18

11

16

15

12

16

17

