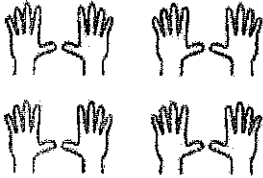


Math Numbers Operations and Algebra 4_4

Student Name: _____

Date: Day 4


1.



10 fingers \times 4 =

- A. 40 fingers
- B. 80 fingers
- C. 100 fingers

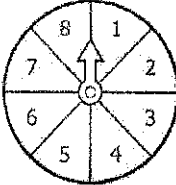
2.



$\text{***} = \text{---}$

- A. 5×4
- B. 5×3
- C. 5×5

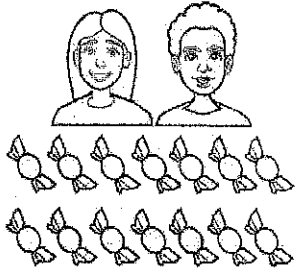
3.



Lin spins 5 times.
Each time, she gets 7 points.
How many points in all?

- A. 35
- B. 2
- C. 12

4.



Two kids ate 7 candies each.
How many did they eat in all?

- A. 2
- B. 14
- C. 7

5.

There are 6 buckets.
Each bucket has 0.94 gallons of water.
About how much water in all?

- A. 6 gallons
- B. 5 gallons
- C. 7 gallons

6.

$$\begin{array}{r} 26 \\ \times 3 \\ \hline \end{array}$$

What do you do first?

- A. 3×2
- B. $6 + 3$
- C. 3×6

7.

$$\begin{array}{r} 143 \\ \times 9 \\ \hline \end{array}$$

What do you do first?

- A. 9×1
- B. 9×4
- C. 9×3

8.

32×12 is closest to ____

- A. 30×10
- B. 30×3
- C. 35×15

9.

$$2 \times \underline{\quad} = 6 \times 2$$

- A. 6
- B. 8
- C. 2

10.

$$101 \text{ about equals } \underline{\quad}$$

- A. 10×11
- B. 10×10
- C. 10×12

11.

$$\begin{array}{r} 721 \\ \times \quad 8 \\ \hline \end{array}$$

- A. 5768
- B. 5087
- C. 4987

12.

There are 6 classes.
Each class has 16 students.
How many students in all?

- A. 22
- B. 96
- C. 56

13.

There are 84 plums in 7 equal groups.

How many plums in each group?

A. 11

B. 12

C. 10

14.

$$\begin{array}{r} 87 \\ \times 8 \\ \hline \end{array}$$

A. 655

B. 696

C. 647

15.

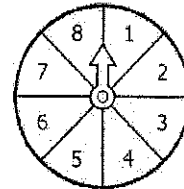
$$\begin{array}{r} 62 \\ \times 8 \\ \hline \end{array}$$

A. 496

B. 486

C. 70

16.



Nan spins 5 times.

Each time, she gets 6 points.

How many points in all?

A. 1

B. 30

C. 11