


Math Numbers Operations and Algebra 4_3

Student Name: _____

Date: Day 3

1.



$\$10.00 \times 5 = \underline{\quad}$

- A. \$50.00
- B. \$15.00
- C. \$10.00

3.

$10 \times \underline{\quad} = 90$

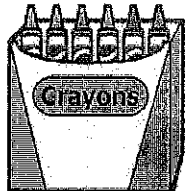
- A. 90
- B. 8
- C. 9

2.

71 *about* equals $\underline{\quad}$

- A. 10×6
- B. 10×9
- C. 10×7

4.



The box has 3 rows.
Each row has 12 crayons.
How many crayons in all?

- A. 9
- B. 15
- C. 36

5.

Max's foot is about 12".
His hockey stick is 6.2 times longer.
About how long is the hockey stick?

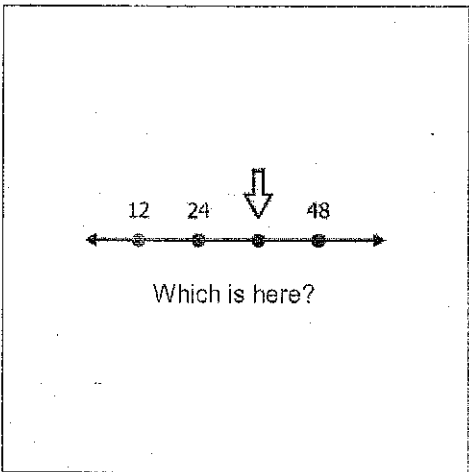
- A. 60"
- B. 72"
- C. 18"

6.

$$\begin{array}{r} 222 \\ \times 3 \\ \hline \end{array}$$

- A. 666
- B. 660
- C. 225

7.




- A. 42
- B. 36
- C. 30

8.

Jack got 3 pounds of marbles for \$1.10 per pound.
About how much did he pay?

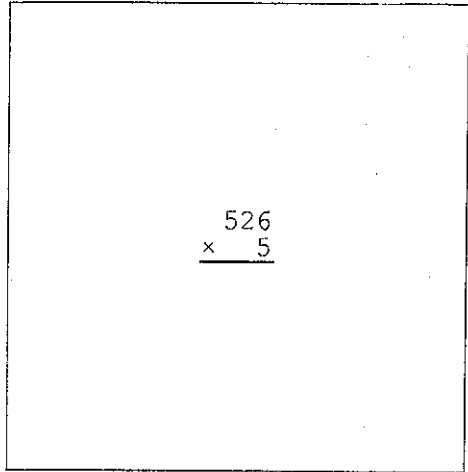
- A. \$4
- B. \$1
- C. \$3

9.



- A. $\$0.50 \times 2$
- B. $\$0.50 \times 3$
- C. $\$0.50 + 5$

10.




- A. 2630
- B. 2605
- C. 2505

11.

Ralph buys 6 toy trucks.
Each truck costs \$5.01.
About how much does he pay?

- A. \$30
- B. \$29
- C. \$36

12.

 = 1 video game.
Each video game costs \$0.30.
You play 1 game.
You spend ____.

- A. $\$0.10 + 3$
- B. $\$0.10 \times 3$
- C. $\$0.10 \times 1$

13.



8 kids share these bananas evenly.

How many bananas does each kid eat?

- A. $1 \frac{1}{8}$
- B. $2 \frac{1}{2}$
- C. $1 \frac{1}{4}$

14.

$$\begin{array}{r} 332 \\ \times 8 \\ \hline \end{array}$$

- A. 2646
- B. 3256
- C. 2656

15.

$$\begin{array}{r} 692 \\ \times 5 \\ \hline \end{array}$$

- A. 3450
- B. 3440
- C. 3460

16.

$$\begin{array}{r} 202 \\ \times 4 \\ \hline \end{array}$$

- A. 206
- B. 408
- C. 808