

Mrs. Ebert's Yellow Group AMI Lessons (Day 16-20)

Day 16

- ★ Read The Rocking Horse
- ★ Complete the Comprehension Quiz
- ★ Complete Lesson Topic: Math Mixed Problems

Day 17

- ★ Read A Day at the Beach
- ★ Complete the Comprehension Quiz
- ★ Complete Lesson Topic: Math Mixed Problems

Day 18

- ★ Read Coconuts!
- ★ Complete the Comprehension Quiz
- ★ Complete Lesson Topic: Math Mixed Problems

Day 19

- ★ Read The Ladybug
- ★ Complete the Comprehension Quiz
- ★ Complete Lesson Topic: Math Mixed Problems

Day 15

- ★ Read Ann Can't Skate
- ★ Complete the Comprehension Quiz
- ★ Complete Lesson Topic: Math Mixed Problems

Day 16

# The Rocking Horse



Billy has a rocking horse. The rocking horse is called Pete. Billy rides Pete every day. He rides across fields. He rides across prairies. He rides over mountains. At the end of the day, Billy puts Pete in his barn at the end of Billy's bed. In the morning, Billy gets Pete back out of the barn, and they go off riding again!

1. What is the boy's name? \_\_\_\_\_

2. What is the horse's name? \_\_\_\_\_

3. Is the horse real? How do you know?

---

---

---

---

---

NAME: \_\_\_\_\_

## DIRECTIONS

Solve each problem.

SCORE

1. 😊 😐

1 Write the numeral.

●	●	●	●	●	●	●	●	●	●
●	●								

2. 😊 😐

5 Draw a fish inside the box.



3. 😊 😐


2 Add. How many in all?



$$\boxed{4} + \boxed{3} = \boxed{\phantom{00}}$$

4. 😊 😐

6 Circle the shorter pants.



5. 😊 😐

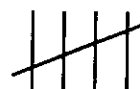
3 Subtract. Cross off two. How many are left?



$$\boxed{5} - \boxed{2} = \boxed{\phantom{00}}$$

6. 😊 😐

7 Count the tally marks. Write the numeral.



7. 😊 😐

8 Irene gets an ice cream with 3 scoops on it. She eats 1 scoop. How many scoops does she have left?

8. 😊 😐

4 Continue the pattern.

1 2 1 2 1 \_\_\_\_\_

\_\_\_\_/8

Total

Day 17

## A Day at the Beach

Linda's mother took her to the beach. Linda wore a big hat to keep the sun off of her face. She brought her pail and her shovel. Linda walked along the beach and collected shells. She watched the seagulls fishing. She watched ships sail along the horizon. It was a very nice day.

Answer the questions.

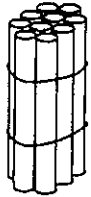
1. Where did Linda go?
2. What did Linda wear?
3. What did Linda bring?
4. What did Linda collect?
5. Who went fishing?



NAME: \_\_\_\_\_

**DIRECTIONS** Solve each problem.

**1.** How many sticks?



\_\_\_\_\_

**2.** Add. How many in all?



$$\boxed{3} + \boxed{5} = \boxed{\phantom{00}}$$

**3.** Subtract. Cross off two. How many are left?



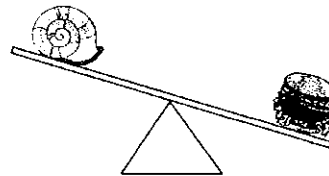
$$\boxed{6} - \boxed{2} = \boxed{\phantom{00}}$$

$$\boxed{4} \quad 2 - \boxed{\phantom{00}} = 2$$

**5.** Does the ball have any flat surfaces?  
Circle:    yes    no



**6.** Circle the object that is heavier.



**7.** Favorite Subject

Math	 
Reading	
Science	 

How many children say science is their favorite subject?

\_\_\_\_\_

**8.** Write an addition number sentence using the numbers 1, 3, and 4.

\_\_\_\_\_

SCORE

1.

2.

3.

4.

5.

6.

7.

8.

\_\_\_\_ / 8


Total

Day 18



# Coconuts!

Many animals live on the island. All of the animals like the coconuts. The monkeys play with the coconuts. The monkeys and the elephants both break the husks and eat its sweet meat. The parrots perch on the coconuts. The coconut crabs suck the coconuts sweet milk. They are all nuts for coconuts!



Which of the animals:

1. Suck the coconut milk?
2. Play with the coconuts?
3. Perch on the coconuts?
4. Break and eat the coconuts?

NAME: \_\_\_\_\_

**DIRECTIONS** Solve each problem.

SCORE

1. 😊 😐

1. Write the number before and after 13.

Before	Number	After
	13	


5. Draw a square. Put a dot outside the square.

2. 😊 😐

2. Add. How many in all?



6. What time is it?  
\_\_\_\_\_ o'clock



4. 😊 😐

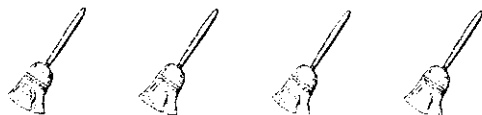
$$\boxed{5} + \boxed{3} = \boxed{\phantom{00}}$$

7. Favorite Activity

Swings	Slide	Monkey Bars	Balance Beam
8	5	7	2

5. 😊 😐

3. Subtract. Cross off two. How many are left?



How many children like the swings?  
\_\_\_\_\_

6. 😊 😐

$$\boxed{4} - \boxed{2} = \boxed{\phantom{00}}$$

8. Jenny is last. Monique is first. Sara is in the middle. Write 1, 2, or 3 to show the order.

Sara      Jenny      Monique

7. 😊 😐

8. 😊 😐


$$\begin{array}{r} \phantom{0}3 \\ + \boxed{\phantom{00}} \\ \hline \phantom{0}3 \end{array}$$

\_\_\_\_ / 8  
Total

Day 19

# The Ladybug

The ladybug is an insect. Like all insects, it has six legs. The ladybug has two sets of wings. The outer set is the hard shell for protection. The inner set is what the ladybug uses to fly. Many ladybugs are red and black, but they can also be yellow and black or orange and black. Some ladybugs even have stripes!



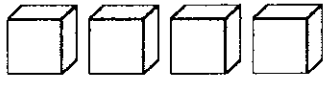
Ladybugs are good insects to have in your garden. They eat other bugs that can eat your vegetable plants.

1. How many legs does a ladybug have? \_\_\_\_\_
2. How many sets of wings are on a ladybug? \_\_\_\_\_
3. True or false: All ladybugs are red and black.
4. True or false: Some ladybugs have stripes.
5. Are ladybugs good for your garden? \_\_\_\_\_

NAME: \_\_\_\_\_

**DIRECTIONS** Solve each problem.

**1.** Write the numeral.



\_\_\_\_\_

**2.** Add. How many in all?



$$\boxed{3} + \boxed{3} = \boxed{\phantom{00}}$$

**3.** Subtract. Cross off three. How many are left?




$$\boxed{7} - \boxed{3} = \boxed{\phantom{00}}$$

**4.**  $2 \boxed{\phantom{00}} 2 = 4$

**5.** Draw a circle.

**6.** Is the object shorter than your arm?

Circle: yes no



**7.** Favorite Recess Game

Games	Hopscotch	■	■	■	■	■	■	■	■
	Handball	■	■	■	■	■	■	■	■
	Tetherball	■	■	■	■	■	■	■	■
	Four Square	■	■	■	■	■	■	■	■
		0	1	2	3	4	5	Votes	

How many children like hopscotch?

\_\_\_\_\_

**8.** Which has more legs: a bird or a dog?

\_\_\_\_\_

**SCORE**

1. 😊 😞

2. 😊 😞

3. 😊 😞

4. 😊 😞

5. 😊 😞

6. 😊 😞

7. 😊 😞

8. 😊 😞

\_\_\_\_ / 8  
Total

Day 20

## Ann Can't Skate

Ann got roller skates for her birthday. "I can't skate,"

Ann said. "Try," her mother told her.

"Try," her father told her.

Ann tried. She was afraid. She fell.

"I can't skate!" Ann cried.

"Try again," her mother told her.

"Try again," her father told her.

Ann tried again. She slipped. She wobbled. Then she rolled. Now Ann can skate!

Circle T if the sentence is true.

Circle F if the sentence is false.

T F 1. Ann got skates for Christmas.


T F 2. Ann is afraid to skate.

T F 3. Ann tried to skate and fell.

T F 4. Ann's mother told her to try again.

T F 5. Ann's father told her to give up.

T F 6. Now Ann can skate.



NAME: \_\_\_\_\_

**DIRECTIONS**

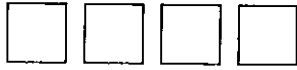
Solve each problem.

SCORE

1. 😊 😐


1. Count the squares. Draw 1 more. Write how many squares there are now.

2. 😊 😐



3. 😊 😐

2. Add. How many in all?



5. 😊 😐

$$\boxed{2} + \boxed{7} = \boxed{\phantom{00}}$$

6. 😊 😐

3. Subtract. Cross off two. How many are left?



8. 😊 😐

$$\boxed{6} - \boxed{2} = \boxed{\phantom{00}}$$

\_\_\_ / 8  
Total

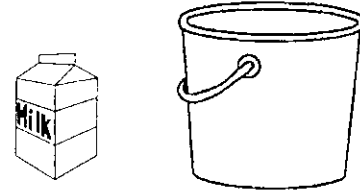
4. Write the missing number.

$$0 + \boxed{\phantom{00}} = 4$$

5. Is the pencil on the right or on the left?



6. Circle the container that holds more.



7. Favorite Type of Movie

Funny	Cartoon	Scary	3-D
	<del>    </del>		<del>    </del>

How many children like funny movies?

\_\_\_\_\_

8. What day comes after Tuesday?

\_\_\_\_\_