

Mrs. Ebert's Yellow Group AMI Lessons (Day 11-15)

Day 11

- ★ Read Little Bat
- ★ Complete the Comprehension Quiz
- ★ Complete Lesson Topic: Math Mixed Problems

Day 12

- ★ Read Jim's Hat
- ★ Complete the Comprehension Quiz
- ★ Complete Lesson Topic: Math Mixed Problems

Day 13

- ★ Read The Kitten
- ★ Complete the Comprehension Quiz
- ★ Complete Lesson Topic: Math Mixed Problems

Day 14

- ★ Read A Balloon Ride
- ★ Complete the Comprehension Quiz
- ★ Complete Lesson Topic: Math Mixed Problems

Day 15

- ★ Read The Sun
- ★ Complete the Comprehension Quiz
- ★ Complete Lesson Topic: Math Mixed Problems

Day 11



Little Bat

Little Bat lived on a farm. During the day he slept high up in the barn. At night he woke up and looked for bugs to eat. Little Bat was friends with the lambs, the piglets, the calf, and the kittens. But Little Bat did not like the spider. The spider was not good to eat. The spider was not friendly. And Little Bat did not like to get sticky web on his wings. So Little Bat and the spider left each other alone!

1. Where does Little Bat live? _____
2. What does Little Bat eat? _____
3. Who are Little Bat's friends? _____

4. Does Little Bat like the spider? _____

NAME: _____

DIRECTIONS Solve each problem.

1. Count how many.



2. How many in all?



3. Three are crossed off. How many are left?



4. $1 + \square = 2$

5. Color the circle.





6. Circle the longer snake.



7. Count how many. Record with tally marks.



Item	Tally
	
	

8. Draw a circle around the group that has less.



SCORE

1. 😊 😞

2. 😊 😞

3. 😊 😞

4. 😊 😞

5. 😊 😞

6. 😊 😞

7. 😊 😞

8. 😊 😞

____ / 8

Total

Day 12

Name _____

Reading Comprehension for Grade 1

Jim's Hat

Jim wanted to go out and play in the snow.

"Put on your hat," said Jim's mom.


Jim put on his hat. He went outside. He found his friends. Hank threw a snowball. Jim threw a snowball. They had a snowball war. Later, Jim went inside for a snack.

"Where is your hat?" said Jim's mom.

Jim put his hand on his head. There was no hat!

"Go outside and find your hat," said Jim's mom.

Jim went outside. There was his hat — on a snowman!



Name _____

Teaching Comp. at Forest School

1. Jim wants to play in the - - - - -

2. Jim goes inside for a - - - - -

3. Jim has lost his - - - - -

4. Jim's hat is on a - - - - -

NAME: _____

DIRECTIONS

Solve each problem.

SCORE

1. 😊 😐

1. Write the number before and after 6.

Before	Number	After
	6	

2. 😊 😐

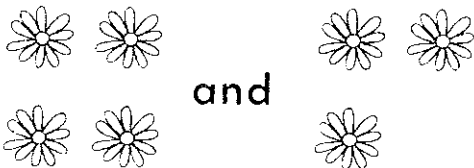
3. Count the sides.

_____ sides



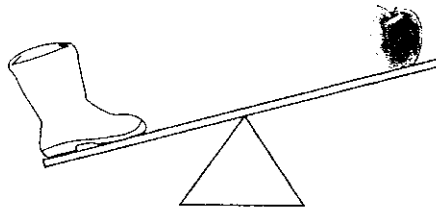
3. 😊 😐

2. How many in all?



4. 😊 😐

6. Circle the heavier object.



5. 😊 😐

3. Two are crossed off. How many are left?



6. 😊 😐

7. Number of Home Runs

Marc	Ramon	Jamal
7	4	15

How many home runs did Ramon hit?

7. 😊 😐

4. Continue the pattern.

A B A B A _____

8. 😊 😐

8. I am the number that comes after 3. What number am I?

___ / 8

Total

Day 13

Name _____

www.EasyTeacherWorksheets.com

The Kitten

Mary found a kitten. The kitten was brown and gray and white. The kitten was lost.

"What a cute kitten!" said Mary. Mary took the kitten home.


"We cannot keep that kitten," said Mary's mom.

There was a knock on the door. It was Mr. Jones from next door.

"Have you seen a kitten?" Mr. Jones said. Mary showed Mr. Jones the kitten.

"Yes, that is my kitten," said Mr. Jones.

"You can come play with my kitten whenever you want to, Mary!"



Answer the questions.

1. What does Mary find?
2. What does mom say?
3. Who is at the door?
4. What does Mary do?
5. What does Mr. Jones say?

NAME: _____

DIRECTIONS Solve each problem.

1. Write the numeral for six.

2. How many in all?



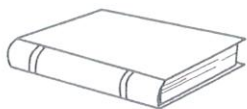
3. One is crossed off.
How many are left?



4. $4 - \square = 2$

5. Will the object stack?

Circle: yes no



6. What time is it?

_____ o'clock



7. Pencil Colors

Red	////
Green	////
Blue	

How many pencils are blue?

8. Mom has 3 flowers.
I give her 1 more.
How many flowers does she have in all?

SCORE

1. 😊 😐

2. 😊 😐

3. 😊 😐

4. 😊 😐

5. 😊 😐

6. 😊 😐

7. 😊 😐

8. 😊 😐

___ / 8

Total

Day 14

A Balloon Ride

A man landed his balloon in the middle of a field. The man got out of the balloon, and went to the farmhouse. The animals went to see the balloon. There was a basket at the bottom of the balloon. The horse got in the basket. The hen got in the basket. The pig got in the basket. Then the balloon went up. The man saw the balloon go up. The man ran out. He was too late. The animals went for a ride!



1. Who got out of the balloon?
2. What was at the bottom of the balloon?
3. Who got in the basket first?
4. Who got in the basket second?
5. Who got in the basket last?
6. Why did the man run out of the farmhouse?
7. What did the animals do?

NAME: _____

DIRECTIONS Solve each problem.

SCORE


1. 😊 😐

1. Circle the larger number.

3 8

2. 😊 😐


2. How many in all?



3. 😊 😐

4. 😊 😐

3. Two are crossed off. How many are left?



5. 😊 😐

6. 😊 😐

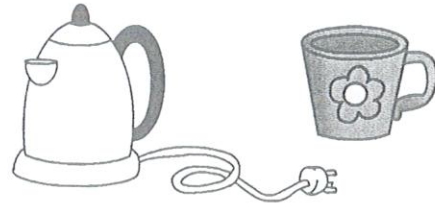
4. Write the missing sign.

$$2 \square 1 = 3$$

5. Draw a line of symmetry.



6. Circle the container that holds more.



7. Favorite Ice Cream

Chocolate Ice Cream	
Strawberry Ice Cream	

How many children like strawberry ice cream?


8. Willis has 2 cats. His mom brings home 1 more. How many cats does Willis have now?

____ / 8
Total

Day 15

Name _____  <https://www.easyteacherworksheets.com>

The Sun



The sun is a star. It is made of gases. The sun is very hot. The sun is very far away. It takes 8 minutes for light from the sun to reach the earth. When the earth turns towards the sun, it is day on that side of the earth. When the earth turns away from the sun, it is night on that side of the earth.

Write three things that you learned about the sun:

1. _____

2. _____

3. _____

NAME: _____

DIRECTIONS Solve each problem.

1. Write the numeral for the ordinal number second.

2. How many in all?



3. Four are crossed off. How many are left?



4. Circle the number sentences that equal four.

$1 + 3$ $2 + 4$

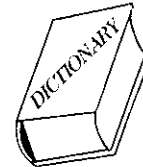
$2 + 2$ $4 + 0$

5. Circle the object that looks like the solid.



6. Is the object shorter than your arm?

Circle: yes no



7.

Awards Won	
6	
5	
4	
3	
2	
1	
0	
	Sue
	Paul
	Rory
	Chu

Name

How many awards does Paul have?

8. How many wheels are on 2 tricycles?

SCORE

1. 😊 😐

2. 😊 😐

3. 😊 😐

4. 😊 😐

5. 😊 😐

6. 😊 😐

7. 😊 😐

8. 😊 😐

____ / 8

Total